

1st Grade Summer Math Packet

Dear Parents,

In addition to the Math Packet, you may find fun games they can play online (www.ixl.com is a great website) as well as apps on your iPhone, iPad or smartphones.

The GW Teacher Supply Store, Professor Toy,, and the Dollar Tree have many workbooks and board games designed to make learning fun...it's summer...have fun while learning!

Children should practice number formation, identifying numbers, and counting.

Enjoy your summer...we'll see you in August!


Outgoing Kindergarten Math

Alien Addition Worksheet 3
Item 4639

Name _____

Alien Addition

Find the sums.




$$\begin{array}{r} 4 \\ + 5 \\ \hline \square \end{array}$$



$$\begin{array}{r} 3 \\ + 3 \\ \hline \square \end{array}$$



$$\begin{array}{r} 2 \\ + 1 \\ \hline \square \end{array}$$



$$\begin{array}{r} 5 \\ + 5 \\ \hline \square \end{array}$$



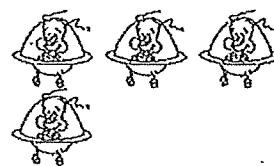
$$\begin{array}{r} 4 \\ + 5 \\ \hline \square \end{array}$$




$$\begin{array}{r} 1 \\ + 7 \\ \hline \square \end{array}$$




$$\begin{array}{r} 2 \\ + 7 \\ \hline \square \end{array}$$



$$\begin{array}{r} 3 \\ + 1 \\ \hline \square \end{array}$$




$$\begin{array}{r} 2 \\ + 5 \\ \hline \square \end{array}$$



$$\begin{array}{r} 2 \\ + 6 \\ \hline \square \end{array}$$

Alien Addition

Find the sums.



$$\begin{array}{r} 2 \\ + 3 \\ \hline \square \end{array}$$




$$\begin{array}{r} 3 \\ + 6 \\ \hline \square \end{array}$$



$$\begin{array}{r} 3 \\ + 5 \\ \hline \square \end{array}$$



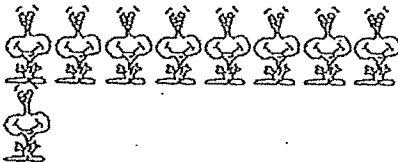
$$\begin{array}{r} 6 \\ + 1 \\ \hline \square \end{array}$$



$$\begin{array}{r} 5 \\ + 4 \\ \hline \square \end{array}$$



$$\begin{array}{r} 2 \\ + 7 \\ \hline \square \end{array}$$



$$\begin{array}{r} 8 \\ + 1 \\ \hline \square \end{array}$$



$$\begin{array}{r} 4 \\ + 3 \\ \hline \square \end{array}$$




$$\begin{array}{r} 1 \\ + 2 \\ \hline \square \end{array}$$

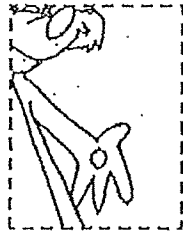


$$\begin{array}{r} 8 \\ + 2 \\ \hline \square \end{array}$$


Solve the addition problems. Then cut out one puzzle piece at a time and paste it in the box that has the same answer.




$$\begin{array}{r} 2 \\ + 5 \\ \hline \end{array}$$




$$\begin{array}{r} 1 \\ + 2 \\ \hline \end{array}$$




$$\begin{array}{r} 3 \\ + 6 \\ \hline \end{array}$$




$$\begin{array}{r} 1 \\ + 0 \\ \hline \end{array}$$



$$\begin{array}{r} 3 \\ + 5 \\ \hline \end{array}$$




$$\begin{array}{r} 1 \\ + 1 \\ \hline \end{array}$$



$$\begin{array}{r} 2 \\ + 2 \\ \hline \end{array}$$




$$\begin{array}{r} 3 \\ + 2 \\ \hline \end{array}$$



$$\begin{array}{r} 2 \\ + 4 \\ \hline \end{array}$$

| | | |
|---|---|---|
| 9 | 2 | 6 |
| 5 | 8 | 3 |
| 7 | 4 | 1 |

Solve the subtraction problems. Then cut out one puzzle piece at a time and paste it in the box that has the same answer.




$$\begin{array}{r} 9 \\ - 3 \\ \hline \end{array}$$



$$\begin{array}{r} 4 \\ - 4 \\ \hline \end{array}$$



$$\begin{array}{r} 8 \\ - 1 \\ \hline \end{array}$$



$$\begin{array}{r} 5 \\ - 2 \\ \hline \end{array}$$



$$\begin{array}{r} 8 \\ - 7 \\ \hline \end{array}$$




$$\begin{array}{r} 7 \\ - 5 \\ \hline \end{array}$$



$$\begin{array}{r} 4 \\ - 0 \\ \hline \end{array}$$



$$\begin{array}{r} 6 \\ - 1 \\ \hline \end{array}$$






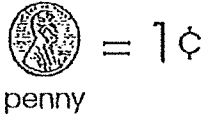


$$\begin{array}{r} 9 \\ - 1 \\ \hline \end{array}$$

| | | |
|---|---|---|
| 6 | 4 | 1 |
| 2 | 7 | 5 |
| 0 | 8 | 3 |





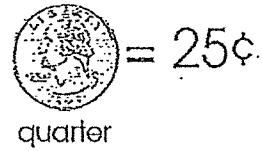
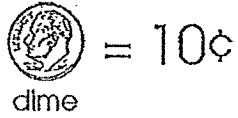
Adding Coins

Add the coins in each piggy bank and write the total amount in the box.







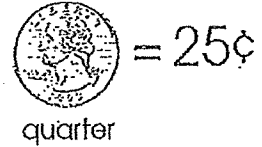
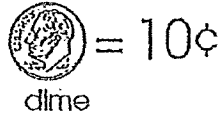
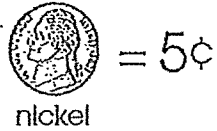
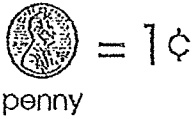
Adding Coins

Add the coins in each piggy bank and write the total amount in the box.



Adding Coins

Add the coins in each piggy bank and write the total amount in the box.



Adding Coins

Add each group of coins and write the total on the line.

1.  _____¢

2.  _____¢


3.  _____¢

4.  _____¢

5.  _____¢

6.  _____¢

7.  _____¢

8.  _____¢

9.  _____¢

10.  _____¢

Adding Coins

Add each group of coins and write the total on the line.

1.  _____¢

2.  _____¢

3.  _____¢

4.  _____¢

5.  _____¢

6.  _____¢

7.  _____¢

8.  _____¢

9.  _____¢

10.  _____¢